

# NUMERACY NON-CALCULATOR



YEAR  
**7**  
2014

## SESSION 2

**40 mins**

Time available for students to  
complete test: 40 minutes

Use 2B or HB  
pencil **only**



# YEAR 7 NUMERACY (NON-CALCULATOR)



1

Together Luke and Emily saved \$150.  
Emily saved twice as much money as Luke.  
How much money did Luke save?

\$25

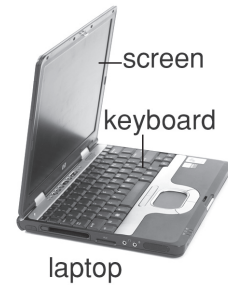
\$50

\$100

\$300

2

The screen of a laptop can be opened to different angles.  
In which of these is the angle between the screen and the keyboard closest to a right angle?



3

Zak has \$79.



How much more money does he need to buy the bike?

\$64

\$66

\$74

\$76

# YEAR 7 NUMERACY (NON-CALCULATOR)



4

Matt and his friends are putting up some tents.

Each tent needs 8 pegs. Each peg can only be used for one tent.

They have 100 pegs.

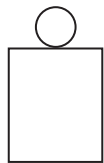
What is the maximum number of tents they can put up?

- 4                      8                      12                      13
- 

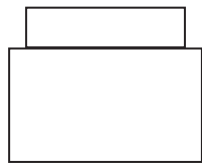
5

Max put one block on top of another block.

This is a drawing of the front view and the side view.

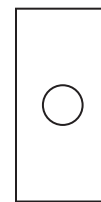
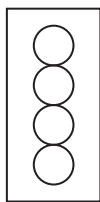


front view



side view

Which of these is a correct top view?

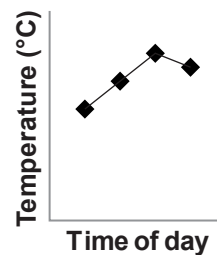
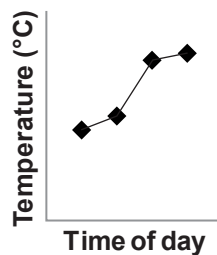
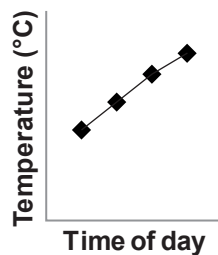
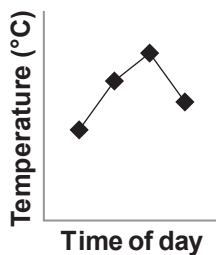


6

On Monday Kai measured the temperature every 2 hours from 9:00 am to 3:00 pm.

Time of day	9:00 am	11:00 am	1:00 pm	3:00 pm
Temperature (°C)	13	20	24	17

Which graph shows Kai's results?









7

Which of these patterns fits the rule, “Double the previous number and add 3”?

- 2, 3, 4, 6, 8, ...
- 2, 7, 12, 17, 22, ...
- 3, 6, 12, 24, 48, ...
- 3, 9, 21, 45, 93, ...

8

Ted uses sticks to make a pattern.  
He starts with 2 sticks for Stage 1.

Stage 1	Stage 2	Stage 3	Stage 4
			
2 sticks	6 sticks	12 sticks	20 sticks

How many sticks does Ted need for Stage 6?

- 24
- 26
- 30
- 42

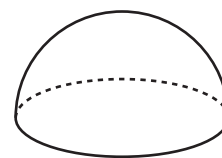
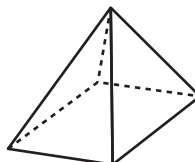
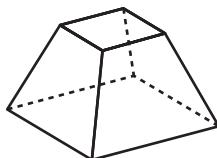
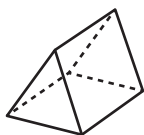
9

Grace poured half a litre of milk into a jug.  
How many millilitres did she pour into the jug?

- 50
- 250
- 500
- 2000
- 5000

10

Which object is a prism?





11

Sandra can run 5 kilometres in 30 minutes.

Running at the same speed, how long will it take Sandra to run 4 kilometres?

18 minutes

20 minutes

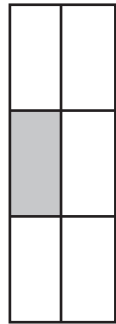
24 minutes


29 minutes

12

Which rectangle has one-third shaded grey?










13

There were 22 people at a party.

The cost was \$24 per person, plus \$40 extra for the cake.

Which of these shows how to calculate the total cost of the party in dollars?

$(40 + 24) \times 22$

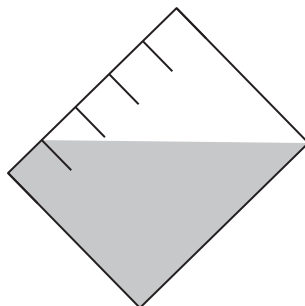
$(22 \times 24) + 40$

$22 + 24 + 40$

$22 \times 24$

14

This cylinder can hold up to 50 mL of water.



How much water is in the cylinder?

10 mL

20 mL

30 mL

40 mL



15

The Year 7 classes at a school collected cans for recycling.  
The table shows the mass each class collected.

	Class 7P	Class 7K	Class 7T	Class 7H
Week 1	5.29 kg	5.32 kg	5.3 kg	4.88 kg
Week 2	4.56 kg	4.01 kg	4.99 kg	5.25 kg

Which class collected the greatest total mass?

Class 7P

Class 7K

Class 7T

Class 7H

16

This table shows how many balloons of each colour are in the clown's bag.

Balloon colour	Number of balloons
red	16
pink	8
blue	3
yellow	5



Without looking, the clown takes a balloon out of his bag.

What is the chance that the balloon is red?

$$\frac{1}{32}$$

$$\frac{1}{16}$$

$$\frac{1}{4}$$

$$\frac{1}{2}$$

17

Which of these values of **?** makes this number sentence true?

$$3 \times \mathbf{?} > 21$$

5

6

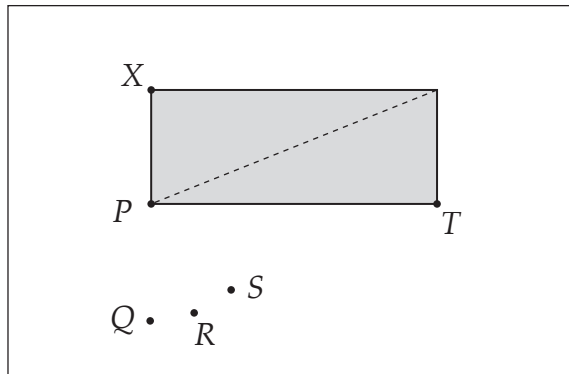
7

8



18

The shaded rectangle will be folded along the dotted line.



Where will point X move to?

P

Q

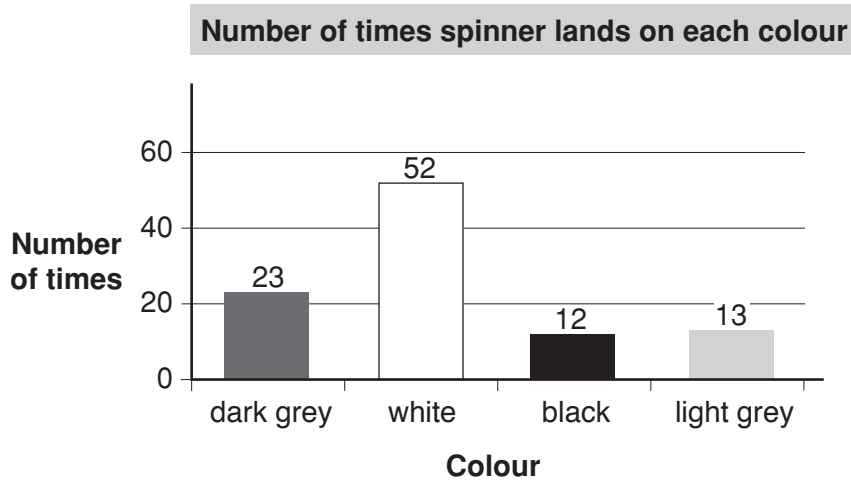
R

S

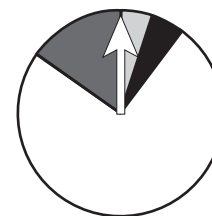
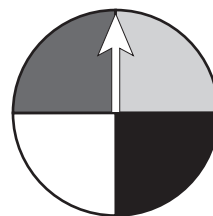
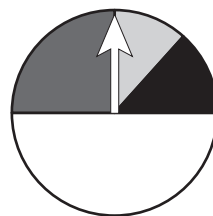
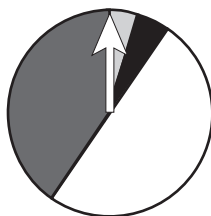
T

19

This graph shows the results of 100 spins of a spinner.




Which of these spinners is most likely to give the results shown in the graph?

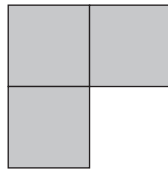




20



Shape 1



Shape 2

Shape 1 is rotated to look like Shape 2.

Which of these could describe the rotation?

45° clockwise

45° anticlockwise

90° clockwise

90° anticlockwise

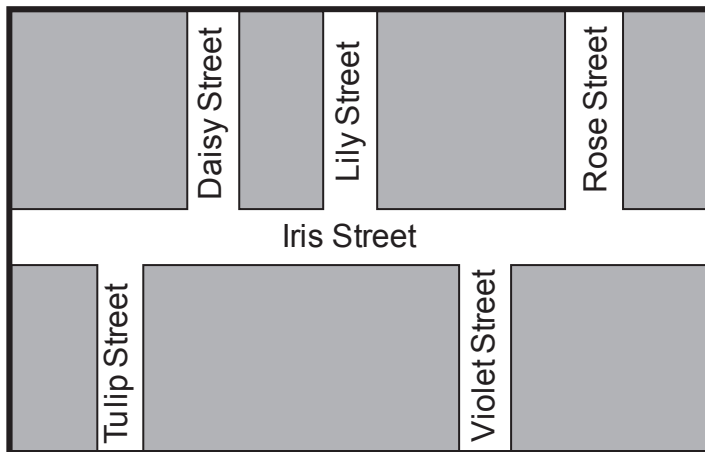
21

Harry used 400 grams of flour to make 24 cupcakes.

How many grams of flour will Harry need to make 36 cupcakes?

grams

22



Levi walked south along Lily Street and then turned right on to Iris Street.

What was the first street he passed on his left?

Tulip Street

Daisy Street

Violet Street

Rose Street





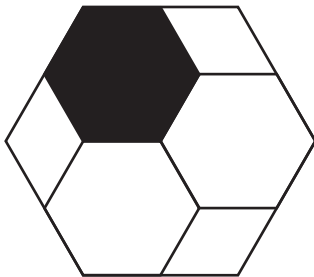
23

Anna's family spends \$120 a week on groceries.  
How much does her family spend in 52 weeks?

\$

24

This shape is made with three regular hexagons and three rhombuses.



What fraction of the shape is black?

$\frac{1}{3}$

$\frac{1}{4}$

$\frac{1}{5}$

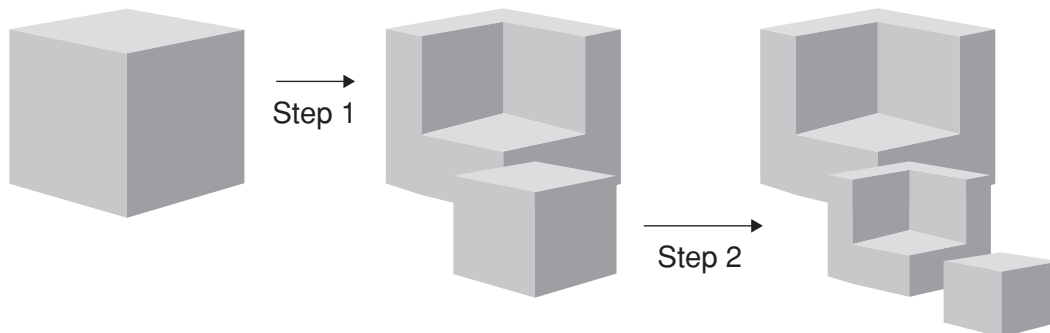
$\frac{1}{6}$

25

This drawing shows how a 3-piece sculpture is made from a large cube.

Step 1: A medium cube is cut from a large cube.

Step 2: A small cube is cut from the medium cube.



What is the total number of faces of the three pieces after Step 2, including the bases?

faces

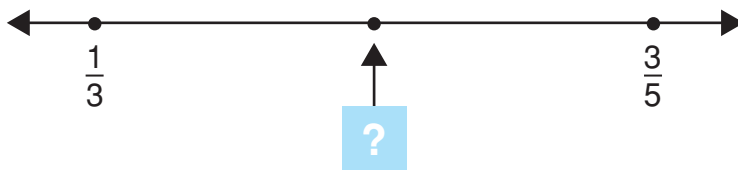


26

James places one box on top of another box.  
 The total height of the two boxes is 19 centimetres.  
 One box is 5 centimetres taller than the other.  
 What is the height of the taller box?

centimetres

27



Which fraction is halfway between  $\frac{1}{3}$  and  $\frac{3}{5}$  on the number line?

$\frac{1}{4}$

$\frac{2}{4}$

$\frac{2}{15}$

$\frac{7}{15}$

$\frac{14}{15}$

28

Which of these is closest to the value of the missing number in this equation?

$$(\text{?} + 59.65) \div 3.14 = 78.5$$

60

85

140

180

300

29

The length of this rectangle is double its height.



The perimeter of the rectangle is 24 centimetres.

What is the area of the rectangle?

square centimetres



30

Five students measured a 20-metre path by taking large steps. This table shows how many steps each student took.

Student	Number of steps
Paul	16
Bella	20
Toby	25
Emily	28
Heidi	40

Which student took steps that were about 80 centimetres long?

Paul

Bella

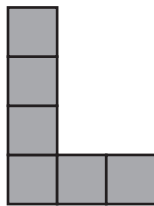
Toby

Emily

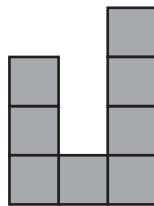
Heidi

31

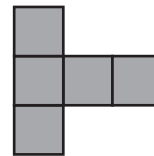
The pictures show the front, side and top views of an object made of cubes.



front view



left side view



top view

How many cubes are needed to make the object?

32

The fraction  $\frac{1}{8}$  equals 0.125 as a decimal.

What does  $\frac{1}{16}$  equal as a decimal?

**STOP – END OF TEST**